



I. Write a Crazy summer story!

One day _____ (name 1) and _____ (name 2) decided to go for swimming and trekking. They thought "Its summer vacation! We have to _____ !" (verb) _____ (name -1) exclaimed. While on their journey _____ (name -1) saw a _____ (animal) climbing a _____ (noun) and that scared _____ (name -2). Later, it was time for a snack so _____ (name- 2) suggested they eat _____ (type of food) and _____ (type of food) and drink _____ (type of food) juice. Summertime is all about _____ (Adjective) experiences, and _____ (name -1) and _____ (name -2) wanted to make the most of it. After a quick _____ (verb) in the _____ (body of water) it was time to _____ (verb) . It had been another _____ (Adjective) Summer day.

II. Prepare any one topic with the help of hints given for Speaking skills - Activity Test

1. Friends

Hint: * How many real good friends do you have?

- * Friends are important for every one .What do you think about it ?
- * What is important - the appearance or the character of a person.
- * How much time do you spend together with your friends?.

2. Free Time (or) Holidays

Hint: * What are your favorite free time activities?

- * What kind of sports do you like?
- * Where would you like to be during your holidays?

3. Different ways to save your rivers

III. Circle the correct word

- | | | |
|----------------|------------|-------------|
| 1. Inteligent | Intiligent | Intelligent |
| 2. Compartment | Compatment | Campatment |

3. Oasis	Oasis	Oassis
4. Polite	Politte	Pollite
5. Defektive	Defective	Defectiv
6. Favourite	Favurite	Favourit
7. Consollidat	Consolidat	Consolidate
8. Survive	Surive	Survevi
9. Adhesev	Adesive	Adhesive
10. Snatch	Snaatch	Sneetch

IV. Learn a new word everyday with meaning.

TELUGU

1. సెలవులలో మీరు గడిపిన విధానాన్ని వివరించండి.

(లేదా)

మీరు దర్శించిన జంటు ప్రదర్శనశాల గురించి రాయండి

:idniH

.।दशहरे के छुट्टियों में आप कहाँ - कहाँ गये |अपने शब्दों में लिखे ?

EVS



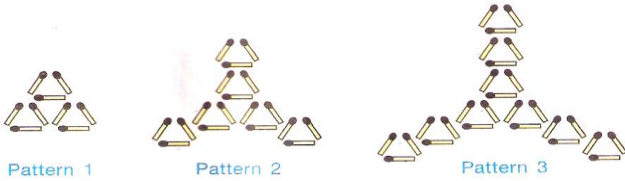
A **river** is a natural flowing [watercourse](#), usually [freshwater](#), flowing towards an [ocean](#), [sea](#), [lake](#) or another river. In some cases a river flows into the ground and becomes dry at the end of its course without reaching another body of water.

Choose any five rivers and collect the details and fill in the following table;

NAME OF THE RIVER	ORIGIN OF THE RIVER	MAIN STATES COVERED

SUB- MATH

1. The sum of the number of match sticks in pattern 2 and pattern 4 is _____




- a.36 b.54 c.27 d.45

2. If SQUARE means CIRCLE,CIRCLE means TRIANGLE and TRIANGLE means RECTANGLE, then what is the shape of the sun

- a. circle b. square c. rectangle d. triangle

3. If the apples B and D are removed from the given arrangement ,then apple A will be _____ from the right end



- a. Fourth b. Third c. Fifth d. Second

4. Select the correct match of shapes which can be made from the solids.

Shapes	Solids	Shapes	Solids
A.		B.	
C.		D.	

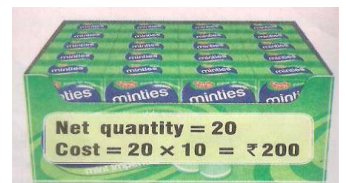
5. Riya wants to arrange the given house numbers in ascending order .Select the CORRECT order.



- a. P,Q,R,S b. S.R,Q,P c. P,R,Q,S d. P,S,R,Q

6. Which of the following can be found from the information given on the box of candies?

- a. It contains 20 candies. c. Cost of 20 candies is 20 rupees
 b. Each candy cost 20 rupees. d. Both A and B



7. There were 2176 cars parked in a parking lot on Monday. if 1122 more cars were parked on Tuesday than Monday , then the number of cars parked on Tuesday are _____

- a.3298 b.1054 c.2298 d.3288

8. Which of the following statement is INCORRECT?



- a. Object P and object Q are of equal weight c. Object X is heavier than object Y.

b. Object S is lighter than object R

d. Object R is lighter than object S.

9. Golu has 48 rupees. How much money will be left with him ,if he buys 2 ice creams, 2 milky bars, one pen and one burger?

a. Rs 5

b. Rs 8

c. Rs 7

d. Rs 11



10. The given table shows the number of students who were absent in a day of a particular week.

Monday	☹☹☹
Tuesday	☹☹☹☹☹
Wednesday	☹☹
Thursday	☹☹☹☹☹☹☹
Friday	☹☹☹☹☹☹☹☹
Saturday	—

How many children were absent on Thursday and Friday altogether?

a. 45 b. 36 c. 9 d. 10

On which day no student was absent?

a. Saturday b. Friday c. Monday d. Tuesday

Note:

- Kindly guide your child in completing the work, but do not do the work.
- Submit the work on the reopening day in a folder with child's name, class & section
- Write on an A4 size paper wherever required.